

J. K. G. INTERNATIONAL SCHOOL, VIJAY NAGAR
PRACTICE PAPER
HALF YEARLY EXAMINATION (2017-18)
CLASS – VII
ENGLISH

Time – 3 hrs.

M.M. 80

General Instructions:

- 1. All questions are compulsory.**
- 2. You may attempt any section at a time.**

SECTION-A

Q1A. Read the passage given below and answer the questions that follow.

Life without water is unimaginable. It is surprising to know that there are places in the world where people have learnt to live in extreme hot conditions, scarce water and practically zero vegetables. This is the life of deserts. The Thar Desert of India is marked by extreme hot and cold conditions, low rainfall and no or very less fertile soil for agriculture. The days are extremely hot and the nights are freezing cold. Cactus is a common plant found in a desert. Camel is known as the ship of the desert as it can walk on sand, go without water for days and can bear the desert's heat. Apart from camels, rattlesnake, scorpions and lizards are also found in deserts. Deserts look beautiful in the pictures because of the sand dunes. The blowing wind lifts and transports the sand from one place to another creating hill-like structures called the sand dunes.

1.1 Choose the option you consider most appropriate. (2)

a. Life of desert does not have:

i. hot conditions ii. Scarce water iii. Zero vegetation iv. Snowfall

b. Nights are extremely _____ in deserts.

i. cold ii. Warm iii. Hot iv. Pleasant

1.2 How are sand dunes created? Describe climate of Thar Desert. (3)

1.3 Complete the following sentences briefly: (2)

a. The Thar Desert of India is marked by _____

b. Camel is known as the ship of the desert because _____

Q1B. Read the following passage and answer the questions that follow. (8)

An owl is a bird. There are two basic types of owls: typical owls and barn owls. Owls live in almost every country of the world. Owls are mostly nocturnal, meaning they are awake at night. Owls are predators- they hunt the food that they eat. Owls hunt for mice and other small mammals, insects, and even fish. Owls are well adapted for hunting. Their soft, fluffy feathers make their flight nearly silent. They have very good hearing, which helps them to hunt well in the darkness. The sharp hooked beaks and claws of the owl make it very easy to tear apart prey quickly, although owls also eat some prey whole. Owl eyes are unusual. Like most predators, both of the owl's eyes face front. The owl cannot move its eyes. Owls are far-sighted, which means they can see very well far away... but they can't see up close very well at all. Fortunately, their distant vision is what they use for

hunting, and they can see far away even in low light. Owls have facial disks around their eyes, tufts of feathers in a circle around each eye. These facial disks are thought to help with the owl's hearing. Owls can turn their heads 180 degrees. This makes it look like they might be able to turn their heads all the way around, but 180 degrees is all the owl needs to see what's going on all around him. Perhaps because of the owl's mysterious appearance, especially its round eyes and flexible neck, there are a lot of myths and superstitions about owls. Many cultures believe that owls are unusually wise. Because owls are nocturnal, some cultures associate owls with bad omens. The screech of the barn owl is considered by many to sound eerily human, like a person screaming. However, owls probably do not interact with the fates of humans at all. In fact, some owl species may become extinct because of humans.

1. Which of the following is NOT true about owls?

- a. Owls eat small animals. b. Owls fly silently. c. Owls have poor vision

2. What is the eyesight of the owl used for?

- a. flying b. hunting c. sleeping

3. What is the purpose of this story?

- a. to entertain b. to inform c. to persuade

4. What would be a good title for this story?

- a. Owls Hunt At Night b. Owls Are Interesting Animals c. Owls Have Flexible Necks

5. What is a predator?

- a. a small feather b. an animal that hunts other animals c. a small mouse

6. Which of the following IS true?

- a. Owls have a strong, bent beak. b. Most owls hunt for food during the day. c. Owls are dangerous to humans.

7. Why does it look like an owl can turn its head completely around?

- a. They are able to turn their heads very quickly.
b. They have ears located on the sides of their head. c. They can turn their heads 1/2 of the way around.

8. Write the opposites of the words given below.

- a. awake
b. wise

SECTION-B+C

Q2. Write a letter to the Editor of a newspaper, suggesting the necessity of a public park in your area/locality.

(5)

OR

Write an article on 'How to keep your environment clean'.

Q3. You are Mohit/Mini of class 7th. Write a report for your school magazine on 'Heavy School-bags'. Mention the impact of such bags on students using the hints below:(5)

Age of IT-but students become the beast of burden-an average school bag of middle class weighs 6-8kgs-volume of notebooks for class-work, home-work, test-work-all these books piled up exceeds the students own weight-mentally tired-heavy bags not essential-should be done away with-but not to demoralize students.

Q4. You are Anu/Ankit, the Editor of your school's magazine. Draft a notice inviting students to submit their original stories, articles, poems, etc, for the school's magazine. Don't use more than 50 words. (5)

Q5. Fill in the blanks with suitable prepositions. (4)

- a. There is a bridge ____ the stream.
- b. He fell ____ the cycle.
- c. Someone is knocking ____ the door.
- d. The hunter killed the bird ____ a stone.

Q6. Fill in the blanks with suitable determiners. (4)

- a. She has bought ____ pens
- b. ____ father was a physician.
- c. ____ grapes are sweet and juicy.
- d. How ____ eggs are there in the basket.

Q7. Fill in the blanks with the correct form of verbs given in the brackets. (4)

- a. The patient _____ (die) before the doctor came. (PAST PERFECT)
- b. The cattle _____ (graze) in the field. (PAST PERFECT CONTINUOUS NEGATIVE)
- c. The child _____ (cut) teeth for two weeks. (PAST PERFECT CONTINUOUS)
- d. Two and two _____ (make) four. (PRESENT INDEFINITE)

Q8. Write the antonyms for the words given below. (4)

- a. arrive
- b. brave
- c. accept
- d. barren

Q9. Following sentences have not been edited. Find the mistake in each sentence. Write the correct word and also underline the wrong word. (4)

- a. The house who is next to Ram's is for sale. _____
- b. I saw a man which wore a red shirt. _____
- c. Shall you shut the door, please? _____

d. The function ended today was really good. _____

SECTION-D

Q10. Answer the following questions in brief. (Any 5)
(5X2=10) (Plus additional question worth 1 mark) (10+1=11)

- a. What was Mason afraid of?
- b. Which site left the writer transfixed in awe?
- c. Why does the poet compare himself to a cloud?
- d. What accompanied the daffodils while they danced in the breeze?
- e. How does the power-cut help the writer to enjoy the beauty of the night?
- f. Who was waiting for author when he reached Gavvan?
- g. What ensured the good quality of food on Ratan Singh's dhaba?

Q11. Answer the following question in detail. (Any 2) (4X2=8)

- a. Describe the house of the first landlord.
- b. Why did the landlord complain about the old miser's house?
- c. What made the experience of eating at a dhaba an unpleasant one for the passengers?
- d. Describe the town of Hassanpur in your own words.

Q12. Write the meaning of the words given below. (Any 5) (1X5=5)

- a. din
- b. celestial
- c. ponderous
- d. fortnight
- e. flag-down
- f. ill-kempt
- g. mirth

Q13. Read the extract and answer the questions that follow. (4)

The waves beside them danced; but they

Outdid the sparkling waves in glee:

A poet could not but be gay,

In such a jocund company.

- a. What did the poet carry away from the scene?
- b. Who is the poet referring to by the word 'they' in the first line?
- c. Name the poet and the poem from where these lines have been taken.

Q14. VALUE BASED QUESTION: (3)

The beauty, splendor and magnificence of 'nature' has often made man aware of his own shortcomings. Write your experiences.

Q15. General awareness:

- a. Who sworn as the 13th Vice-President of our country last month? (2)
- b. Dr. Bhakti Yadav, who passed away recently was the first woman doctor of which state? (2)

c. To which country, a delegation from our school went under 'Student Exchange program'? (1)

J. K. G. INTERNATIONAL SCHOOL, VIJAY NAGAR
PRACTICE PAPER
HALF YEARLY EXAMINATION (2017-18)
CLASS – VII
Hindi

Time – 3 hrs.

M.M. 80

- निर्देश—(क) सभी प्रश्न करने अनिवार्य हैं।
(ख) प्रश्न पत्र को ध्यान से पढ़कर प्रश्नों के उत्तर पुस्तिका में स्वच्छता से दिजिए।
(ग) लिखावट पर विशेष ध्यान दें।

खंड 'क'

अपठित बोध

प्रश्न 1 निम्नलिखित गद्यांश को पढ़कर पूछे गए प्रश्नों के उत्तर लिखिए। (8)

मनुष्य की विशेषता उसके चरित्र में है चरित्र के कारण ही एक मनुष्य दूसरे से अधिक आदरणीय समझा जाता है विद्या का मान सज्जन तभी करते हैं। जब विद्यावान विनय एवं चरित्र से युक्त हो। विद्या बल तथा पद होते हुए भी रावण अपने राक्षसी कर्म के कारण निंदनीय था। रावण विद्यावान होते हुए भी वंदनीय नहीं बन पाया मनुष्य का मूल्य उसके चरित्र में है। विनय, उदारता, लालच में न पड़ना, धैर्य, सत्य भाषण, वचन का प्रतिपालन करना और कर्तव्य परायण ये सब गुण चरित्र में आते हैं।

- (क) मनुष्य की विशेषता किसमें है? (1)
(ख) 'गुण' शब्द का विपरीतार्थक शब्द क्या है? (1)
(ग) मनुष्यका आदर किन कारणों से होता है? (2)
(घ) रावण निंदनीय क्यों था? (2)
(ङ.) चरित्र में कौन कौन से गुण आते हैं? (2)

प्रश्न 2 निम्नलिखित काव्यांश को पढ़कर पूछे गए प्रश्नों के उत्तर लिखिए। (7)

कहती है सारी दुनिया जिसे किस्मत
नाम है उसका हकीकत में मेहनत।
जो रचते हैं, खुद अपनी किस्मत,
वे कहे जाते हैं साहसी
जो करते हैं, ईश्वर से शिकायत वे कहे जाते हैं, आलसी।
जो रुक गया उसका नामो निशाँ
जो चलता रहा अपनी मंजिल वो पा गया।
खुशी के हकदार हैं वही, जिन्होंने दुःख को सहा
छोड़ के दामन फूलों का, काँटों की राह चुना।

निराशा का अंधकार मिटाकर,आशा केदीप जलाओ
छोड़ भाग्य की दुहाई अपनी किस्मत स्वयं बनाओ ।

- (क)हकीकत में किस्मत किसे कहते हैं? (2)
(ख)जो अपनी किस्मत रचते हैं उन्हें क्या कहते हैं? (2)
(ग) 'फूल' के पर्यायवाची शब्द लिखिए। (1)
(घ) 'छोड़ के दामन फूलों का,काँटों की राह को चुनना'पंक्ति का आशय स्पष्ट कीजिये । (1)
(ड.)इस काव्यांश में कौन सा सन्देश निहित है? (1)

खंड 'ख'

व्याकरण

- प्रश्न 3 (क)'विकारी' शब्द के भेद बताइये। (1)
(ख)निम्नलिखित तत्सम शब्दों के तदभव शब्द लिखिए - (1)
कर्म,गृह
- प्रश्न 4दिए गए समरूपी भिन्नार्थक शब्दों के अर्थ लिखकर वाक्य निर्माण कीजिये। (2)
परिमाण,परिणाम
- प्रश्न 5'गौ' शब्द के दो दो अर्थ लिखिए। (2)
- प्रश्न 6 (क)'अनु'और 'स'उपसर्ग लगाकर नया शब्द बनाइये । (1)
(ख)सहपाठी शब्द में से उपसर्ग और मूल शब्द अलग अलग करके लिखिए। (2)
- प्रश्न 7(क)'अक' प्रत्यय लगाकर नवीन शब्द बनाइये। (1)
(ख)लिखावट शब्द में से प्रत्यय और मूल शब्द अलग-अलग करके लिखिए। (2)
- प्रश्न 8निम्नलिखित समस्तपदों का विग्रह कीजिये और समास के भेद भी लिखिए। (2)

नीलकमल

खंड 'ग'

पाठ्य पुस्तक

पठित गद्यांश

प्रश्न 9 निम्नलिखित गद्यांश को पढ़कर पूछे गए प्रश्नों के उत्तर लिखिए।

(5)

स्वयंसेवकों ने आधे मील की दूरी नमक भंडार की यात्रा पूरी की। नमक के भंडारों को चारों ओर से पानी भरी खाइयों से घेरकर रखा गया था। उसकी रखवाली के लिए सूरत पुलिस के 400 सिपाही तैनात थे। उन्हें आदेश देने के लिए आधा दर्जन अंग्रेज अधिकारी थे। पुलिस के पास पाँच फुटी लाठियाँ थीं, जिनके सिरों पर लोहे जड़े थे। कँटीले तारों के भीतर, जहाँ पर भंडार था, 25 बंदूकधारी जवान खड़े थे।

(क) सेवकों ने कहाँ तक की दूरी तय की?

(2)

(ख) पुलिस के पास क्या हथियार थे?

(2)

(ग) लाठियाँ और स्वयंसेवकों को एकवचन में लिखिए।

(1)

प्रश्न 10 निम्नलिखित प्रश्नों के उत्तर लिखिए।

(6)

(क) पत्रकारिता का पहला सिद्धांत और उसका उद्देश्य क्या है?

(2)

(ख) मोहन के अनुसार चंदा देने का परिणाम क्या होता है?

(2)

(ग) लेखक लाल कृष्ण आडवाणी ने अपनी दादी के साथ क्या शरारत की?

(2)

पठित काव्यांश

प्रश्न 11 निम्नलिखित काव्यांश को पढ़कर पूछे गए प्रश्नों के उत्तर लिखिए।

(5)

पकड़ वारि की धार झूलता है मेरा मन,

आओ रे सब मुझे घेरकर गाओ सावन।

इंद्रधनुष के झूले में मिल सब जन,

फिर फिर आए जीवन में सावन।

(क) कवि का मन किस प्रकार झूलता है?

(2)

(ख) काव्यांश की इन पंक्तियों में क्या कामना की गयी है?

(2)

(ग) 'वारि' शब्द के दो पर्यायवाची शब्द लिखिए।

(1)

प्रश्न 12 निम्नलिखित प्रश्नों के उत्तर लिखिए।

(6)

(क) वीर के व्यक्तित्व में किन गुणों का समावेश होता है ?

(2)

(ख) हरियाली को हंसमुख क्यों कहा गया है?

(2)

(ग) सावन के आने पर पृथ्वी पर क्या क्या परिवर्तन दिखाई देते हैं? (2)

प्रश्न 13 सामान्य ज्ञान प्रश्न

(क) भारत देश में कुल कितने राज्य हैं? (1)

(ख) टैक्स (कर) से संबंधित कौन सा नया कानून अभी हाल में ही लागू किया गया? यह कानून किस दिनांक से लागू किया गया? (2)

(ग) आपके स्कूल में आरम्भ हुए नवीन शैक्षिक कार्यक्रम का नाम लिखिए। यह कार्यक्रम किन कक्षाओं के लिए आयोजित किया गया है? (2)

मूल्यपरक प्रश्न -

प्रश्न 14 पुस्तकें जीवन को कैसे प्रभावित करती हैं? अपने विचार लिखिए। (4)

खंड 'घ'

लेखन

प्रश्न 15 निम्नलिखित में से किसी एक विषय पर निबंध लिखिए। (10)

(क) विद्यार्थी जीवन

(ख) प्रदूषण: आज की सबसे भयंकर समस्या

प्रश्न 16 अपने मित्र को पुरस्कार मिलने पर बधाई पत्र लिखिए। (5)

प्रश्न 17 विद्यालय में मनाये गए वृक्षारोपण कार्यक्रम के उपर एक डायरी लिखिए। (5)

J.K.G. INTERNATIONAL SCHOOL VIJAY NAGAR

SAMPLE QUESTION PAPER

HALF YEARLY EXAM (2017-18)

SUBJECT – MATHS

CLASS-VII

Time 3 hrs.

M.M. 80

Instructions :

- All questions are compulsory.
- Read carefully and do neatly
- The question paper consists of 30 questions divided into 4 sections
- **Section A** contains 5 questions of 1 mark each , **Section B** contains 7 questions of 2 marks each , **section C** contains 8 questions of 3 marks each , **Section D** contains 8 questions of 4 marks each. , **Section E** –General Awareness(Reasoning) contains 2 questions of 5 marks

SECTION – A

(5 X 1)

Q.1. Find an integer whose product with (-1) equals 59

Q.2. Find $\frac{2}{3}$ of an hour .

Q.3 .In a set of data,if the maximum value is 75 and range is 20.find the minimum value?

Q.4. Write $3x+5=16$ in statement form .

Q.5. find the angle which is equal to its complement.

SECTION – B

(7 X 2)

Q.6 .Subtract -284 from the sum of -147 and 233.

Q.7 A die is rolled once. Find probability of getting: (a) an even number
(b) an odd number

Q.8 .find the mean of first 10 odd numbers.

Q.9. 11 added to twice a number gives 45 .find the number.

Q.10 .Find the measure of an angle which is :

(a) 14° more than its complement

(b) 25° less than its supplement

Q.11. In a right triangle the two acute angles are in the ratio 7:11.find the acute angles.

Q.12. The sides of a triangle are 3 cm ,4 cm and 5 cm .Determine if it is a right angled triangle

SECTION – C

(8 X 3)

Q.13 .Find the value of the following expressions

(a) $1982 \times (-16) + (-1982) \times 84$

(b) $3657 \times 99 - (-3657)$

Q.14 .By what number should $68\frac{1}{5}$ be multiplied to get $15\frac{2}{5}$?

Q.15 .Fill in the blanks

(a) The probability of a sure event is _____

(b) The probability of an impossible event is _____

(c) The probability of an event can never be greater than _____

Q.16. The product of two numbers is $23\frac{3}{4}$. if one of the numbers is $6\frac{11}{14}$, then find the other .

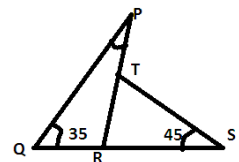
Q.17 .IF $LA + LB = 116$ AND $LB + LC = 126$.Find the measure of each of the angles of the triangles.

Q.18. Find:

(a) PRS

(B) PRQ

(c) PTS



Q.19. Solve: (a) $3\frac{1}{2} \div 1\frac{1}{4} \times \frac{1}{2}$
(b) 2.475×1.5

Q.20. In a quiz +2 marks are given for a correct answer, -1 mark for an incorrect answer and 0 marks for not attempting a question. Radhika scored 30 marks .if she got 18 correct answers, how many questions did she attempt incorrectly?

SECTION – D

(8 X 4)

Q.21 .If a pair of socks cost ₹ 17.85 and a pair of shoes cost ₹ 169.65, then how many sets of socks and shoes can be purchased for ₹ 1500?

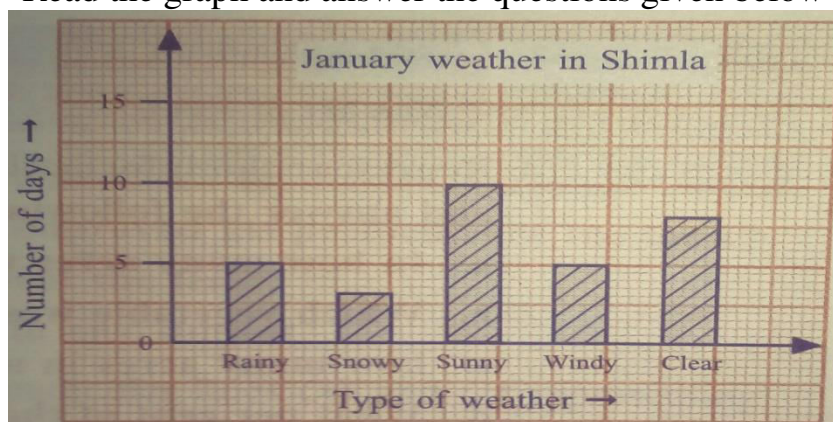
Q.22 .The length of a rectangle is 5 cm more than its breadth .If the perimeter of the rectangle is 38 cm, find its area.

Q.23. A tall tree is broken at a height of 8m from the ground and its top touches the ground at distance of 15 m from the base of the tree .find the original height of the tree.

Q.24 .In the given figure AD bisects LA and AD is perpendicular to BC.Prove that ABC is an isosceles triangle.

Q.25. The adjacent bar graph shows the weather in Shimla in the month of January.


Read the graph and answer the questions given below



- How many rainy days were there in January in Shimla?
- How many clear days were there ?
- How many more sunny days than snowy days were there ?
- Are there more rainy days or windy days?

Q.26. Tanuj is 4 times as old as his son .After 16 years ,he will be twice as old as his son .find his son 's present age

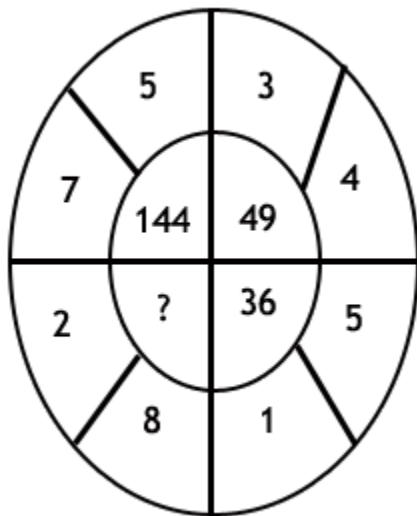
Q.28. The following table shows the favorite sport of 200 students of a school. Represent the Data in a bar graph



SECTION – E

(5)

Q.29. Number Puzzle: Which number replaces the question mark



www.allindiaexams.in

Q.30 : Solve the below clock puzzle. Replace question mark with correct time?



www.allindiaexams.in

J. K. G. INTERNATIONAL SCHOOL, VIJAY NAGAR
PRACTICE PAPER
HALF YEARLY EXAMINATION (2017-18)
CLASS – VII
SCIENCE

Time – 3 hrs.

M.M. 80

GENERAL INSTRUCTION:

- (i) All questions are compulsory.
- (ii) Question numbers 1 to 2 in section A are one mark question. These are to be answered in one word or in one sentence.
- (iii) Question number 3 to 5 are two marks questions. These are to be answered in about 30 words each.
- (iv) Question number 6 to 15 are three marks questions. These are to be answered in about 50 words each.
- (v) Question number 16 to 21 are five marks questions. These are to be answered in about 70 Words each.
- (vi) In section B question number 22 to 27 are explanatory questions based on practical skills and each question carries two marks.

Section-A

- Q-1 Write the full form of ORS. (1)
- Q-2 Which acid is found in Apple? (1)
- Q-3 If we burn silk fibre it gives the smell of burning hair. Why? (2)
- Q-4 What are the elements of weather. (2)
- Q-5 Write two effects of application of heat. (2)
- Q-6 An animal X pick up the food directly by their mouth and eat quickly. They bring back the food in their mouth to chew it again by a process Y. The stomach of these type of animal are divided into Z numbers of chambers. Name the type of animal X, the process Y and the number Z. (3)
- Q-7 With the help of a flow chart describe the life cycle of a silkworm. (3)
- Q-8 Cutting wood into pieces is a physical change, Explain. (3)
- Q-9 Write one difference between sandy, loamy and clayey soil. (3)
- Q-10 Why are mercury used in thermometer? (3)
- Q-11 Write two effects of application of heat. What is the relation between joules and calories? (3)
- Q-12 Why does a frog have a dual mode of breathing? (3)
- Q-13 What are the action of intestinal juices on carbohydrate, protein& fat? (3)
- Q-14 An organism P breathes through moist skin, Q breathes through tracheae and organismR breathes through gills. What are P,Q and R? (3)
- Q-15 $C + O_2 = CO_2$ Which type of reaction it is? Explain. (3)
- Q-16 Give reason:
- a) The fire fighting suits are always bright and shiny.
 - b) Slabs of ice are covered with gunny bags. c) Igloos are double-walled houses. (5)
- Q-17 a) Name the products obtained when acids react with metal carbonates. Write the chemical reaction of it. b) Give an example to show that hydrogen gas is produced when acid reacts

with metal. (5)

Q-18 a) What is the importance of quartz in modern clock? Name two modern time measuring devices. b) Name the instruments by which you can measure speed and distance. (5)

Q-19 A car moves with a speed of 30 km/h for 20 minutes and then at a speed of 48 km/h for the next 20 minutes. Calculate the total distance covered by the car. (5)

Q-20 Explain The following statements:

- a) The elephant has large ears. b) Red-eyed frog has sticky pads on its feet. (5)
c) Penguins have webbed feet.

GENERAL AWARENESS QUESTIONS

Q-21 a) Is there any speed difference between the surface and core of sun?

b) What is cellular leap forging?

c) What is an exoplanet?

d) Which is the oldest science museum in the world?

e) What is TRAPPIST- 1? (5)

Section-B

Q-22 Clinical thermometer has a kink just above the bulb Why? (2)

Q-23 200 mL of water takes 25 minutes to percolate completely. Calculate the percolation rate of water in the soil. (2)

Q-24 Which gas turns lime water milky? Name the process by which living beings produce this gas. (2)

Q-25 If you connect a tester with an eraser the bulb will not glow but it will glow in contact with a safety pin. Why? (2)

Q-26 If you hold a pen by your right hand and stand in front a mirror what will you observe? (2)

Q-27 Why does a clean mirror become cloudy if you exhale in front of it? (2)

J. K. G. INTERNATIONAL SCHOOL, VIJAY NAGAR
PRACTICE PAPER
HALF YEARLY EXAMINATION (2017-18)
CLASS – VII
SOCIAL SCIENCE

Time – 3 hrs.

M.M. 80

General Instructions:

- 1. All questions are compulsory.**
- 2. Write the answer neatly.**
- 3. Marks are indicated against all the questions.**
- 4. Question No. 1 to 12 are of 1 Marks each,**
- 5. Question No. 13 to 23 are of 3 Marks each**
- 6. Question No.24 to 29 are of 5 Marks and**
- 7. Question No. 30 is of 5 Marks.**

Q:-1 Name the types of taxes collected during the sultanate period .

1x12=12

Q2.Who was Babur?

Q3.What is a Shikara?

Q4 What do you mean by Hinterland?

Q5Who is the head of the executive?

Q6.What do women do on International Women Day?

Q7When was the Tawa Dam completed?

Q8. What do you know about Reservoir?

Q9.What is called the uppermost layer of the earth?

Q10.What is a Volcano?

Q11.Why do green plants use carbondioxide?

Q12.What happened to the Indira point during the Tsunami of 2004?

Q13. Describe in brief Tughlaq's policy of token currency.

3X11=33

Q14.How did Babur become the ruler ofDelhi?

Q15How did a temple communicate the importance of a king:?

Q16.How does a government function in a state?

Q17. What do you mean by an MLA?

Q18.Was Rashundari Devi a superstitious women? If not, why not?

Q19. How has theTMS helped the fishworkers?

Q20. How is the earth a dyna mic planet?

Q21.Give an account of the work of sea waves.

Q22.Why is the temperature in cities much higher than that of villages? (Value based)

Q23. How are spring and neap tides formed?

Q24 Give an account of Muhammad Tughluq's administration.

5X6=30

Q25. What do you know about the Mughal relation with other rulers especially the Rajputs?

Q26. How did some MLAS become ministers? Explain.

Q27. What do you know about the interior of the earth? Explain with the help of a diagram.

Q28. Explain the work of a river with the help of a diagram.

Q29 On the outline map of India mark the following cities which are military companions under Akbar & Aurangzeb

1X5=5

a. Chittor

b. Ajmer

c. Delhi

d. Punjab

e. Bengal

(5)

Q30. General Knowledge:

1. When do we celebrate Water Day?
2. Whose Birthday do we celebrate on 5th September?
3. Which date do we show thankfulness to our planet.
4. Name the city where we can hear the Big Ben's Melodious Chimes.
5. Where does the Pyramid of Giza located.

