

**Reading Skills**

**Q1. Unseen comprehension:**

/8

A little boy was playing near a farm when he saw a signboard, 'Puppies For Sale'. He checked his pockets and found enough money to buy a small puppy. He requested the farmer to show him the puppies. The farmer let out a shrill whistle and out of the doghouse came running four little balls of fur. The boy's eyes lit up with delight. He then noticed another puppy, a very small in size, running towards him in an awkward manner, trying his best to catch up with the others. The little boy made up his mind to buy that puppy. The farmer told the boy to buy another puppy as this puppy will not be able to run and play with him like others. The boy quietly rolled up one leg of his trousers to reveal a wooden leg. He then looked up at the farmer and said, "I don't run too well myself, and the puppy will need someone who understands."

**MCQ.**

- i) The boy requested the farmer to show him the \_\_\_\_\_.  
a) puppies    b) kittens    c) calves    d) cubs
- ii) The boy chose a puppy who \_\_\_\_\_ in an awkward manner.  
a) Smiled    b) walked    c) jumped    d) ate
- iii) The boy was \_\_\_\_\_ to see the puppies coming out of the doghouse.  
a) Scared    b) delighted    c) frightened    d) amazed
- iv) What other word is used for the little puppies in the above passage.  
a) Little balls of foam  
b) Little balls of wool  
c) Little balls of silk  
d) Little balls of fur
- v) How did the farmer treat the boy?  
a) Politely  
b) Harshly  
c) Rudely  
d) Angrily
- vi) Choose the word that describes the boy.  
a) Kind    b) understanding    c) a and b both    d) none of these
- vii) Choose the words from the passage that mean opposite of the given words  
sorrow \_\_\_\_\_ conceal \_\_\_\_\_.

## Writing skills

Q 2) Write a paragraph on **6-8 lines** on any one.

/5

- a) My new hobby      b) My favourite holiday destination

Q3) Write a letter to your uncle telling him about your performance in the half yearly examinations in your school:

Or

Write an application to the Principal of your school requesting her to allow you to go home immediately after the recess as you have an appointment with your doctor.

/5

Q4) Picture composition:

/5



## Grammar

Q5. Write adjectives to describe these persons.

/4

- a) A person who does not like to do any work. \_\_\_\_\_  
b) A person who is always ready to help others. \_\_\_\_\_  
c) A person who does not tell lies. \_\_\_\_\_  
d) A person who is not afraid of anything. \_\_\_\_\_

Q6. Underline the adjectives in the following sentences.

/4

- a) The street was narrow.  
b) The book has colourful pictures.  
c) The sun is made up of hot gases.  
d) The teacher asked me a difficult question.

Q7. Fill in the blanks with the correct degree of the comparison (adjective of quality) given in the brackets.

/4

- a) Vishal is \_\_\_\_\_ than Deepali. (young)  
b) A lion is \_\_\_\_\_ than a wolf. (strong)  
c) Piya has the \_\_\_\_\_ voice in the whole group. (sweet)

d) January is the \_\_\_\_\_ month of the year. (cold)

**Q8. Complete the table of degrees of comparisons.**

/3

Positive degree	Comparative	Superlative
easy	easier	
clever		cleverest
	prettier	prettiest

**Q9. Underline the verbs in the following sentences.**

/5

- a) Two sparrows lived in a banyan tree.
- b) Throw the ball to me.
- c) The ostrich has powerful long legs.
- d) The queen had a magic mirror.
- e) They were good friends.

**Q10. Fill in the blanks with the suitable word from the bracket.**

/5

- a) We \_\_\_\_\_ playing in the park. (am/ were)
- b) I \_\_\_\_\_ having fever last week. (was/ is)
- c) You \_\_\_\_\_ sleeping in the class. (were/am)
- d) She \_\_\_\_\_ an intelligent girl. (are/is)
- e) Her teachers \_\_\_\_\_ happy with her performance.(is/ are)

**Reader**

**Q11. Fill in the blanks and complete the poem.**

/2

Most always when the \_\_\_\_\_

With a \_\_\_\_\_ two or three

They are for my \_\_\_\_\_ or my dad

But \_\_\_\_\_ one for me.

**Q12. Write the meanings of the given words:**

/3

instead \_\_\_\_\_ flounder \_\_\_\_\_ playful \_\_\_\_\_

**Q13. Make sentences using the following words.**

/2

warning:- \_\_\_\_\_

silly:- \_\_\_\_\_

**Q14. Write 2-2 rhyming words of the given words-**

/2

call- \_\_\_\_\_ sight- \_\_\_\_\_

**Q15. Short answer type questions:**

**/8**

- a) Why did the child go up in the hills with the puppy?
- b) How did the mother tiger save her cub?
- c) Why does the baby laugh when her brother calls her silly?
- d) Why was the little fish sad?

**Q16. Long answer type/ value based questions:**

**/3**

- a) People around us are the biggest influence on us. How do you want the people around you should treat you? Do you treat everyone as you wish them to treat you?

**Q17. Dictation -**

**/5**

**Q18. General awareness-**

**/5**

- a) Who wrote the Ramayana?
- b) Which school in Ghaziabad has ranked 1<sup>st</sup> as per CBSE co-curricular activities parameters?
- c) Which god is the father of Arjun?
- d) Who is the current President of our country?
- e) How many rain harvesting tanks are there in your school?

**J.K.G. INTERNATIONAL SCHOOL, VIJAY NAGAR GHAZIABAD**  
**ANNUAL ASSESSMENT 2017-18**  
**PRACTICE PAPER**  
**CLASS – III**

**TIME: 3Hrs.**

**SUB: HINDI**

**M.M: 80**

निर्देश— (क) सभी प्रश्न करने अनिवार्य है।

(ख) प्रश्नों को ध्यान से पढ़कर प्रश्नों के उत्तर –उत्तर पुस्तिका में स्वच्छता से दीजिए।

(ग) उत्तर पुस्तिका का विवरण भी लिखिए।

खण्ड – क (अपठित )

**प्र0.1 अपठित गद्यांश को ध्यान से पढ़िए और पूछे गए प्रश्नों के उत्तर सही विकल्प छोट कर दीजिए –** **5**

एक बार एक बूढ़ा किसान बहुत बीमार हो गया । उसके चार पुत्र थे , जो सदा आपस में लड़ते रहते थे। बूढ़े किसान को उनकी बहुत चिंता रहती थी। उसने कई बार उन्हें प्यार से मिलकर रहने के लिए कहा , पर वे उसकी बात पर ध्यान नहीं देते थे। अंत में उसे एक युक्ति सूझी। उसने लकड़ियों का एक गट्ठर मँगवाया। फिर किसान ने अपने चारों पुत्रों को भी बुलाया और उनसे बारी-बारी से गट्ठर को तोड़ने के लिए कहा । सबने बारी – बारी से उस गट्ठर को तोड़ने की कोशिश की , पर वे तोड़ न सके। तब किसान ने गट्ठर खोल दिया। उसने सब से एक-एक लकड़ी तोड़ने को कहा। सबने एक-एक लकड़ी को आसानी से तोड़ दिया। तब उस बूढ़े किसान ने उन्हें समझाया – “ यदि तुम लड़कियों के गट्ठर की तरह परस्पर मिलकर रहोगे, तो कोई भी तुम्हें हानि नहीं पहुँचा सकेगा। यदि आपस में लड़ते रहोगे, तो एक – एक लकड़ी की भाँति तुम्हें कोई भी हानि पहुँचा सकता है।” इसीलिए कहा जाता है कि एकता में बल होता है।

**1 कौन बीमार था ?**

बच्चा ( )

बूढ़ा किसान ( )

पुत्र ( )

**2 किसान के कितने पुत्र थे ?**

दो ( )

तीन ( )

चार ( )

**3 किसान ने क्या मँगवाया ?**

लकड़ियों का गट्ठर ( )

मिठाई ( )

फूल ( )

**4 किसमें बल होता है ?**

आदमी में ( )

धन में ( )

एकता में ( )

**5 किसान के पुत्रों ने बड़ी आसानी से क्या तोड़ दिया ?**

लकड़ियों का गट्ठर ( )

दरवाज़ा ( )

झाड़ू ( )

खण्ड – ख (व्याकरण )

**प्र0.2 रेखांकित शब्दों के लिंग बदलकर वाक्य दोबारा लिखिए।** **5**

1. माली पौधे लगा रहा है।

2. पिताजी बाजार जा रहे हैं।
3. शेर जंगल में शिकार के लिए घूम रहा है।
4. अध्यापक कक्षा में बच्चों को पढ़ा रहा है।
5. नौकर घर की सफाई कर रहा है।

प्र०.3 दिए गए शब्दों के सही बहुवचन रूप पर ✓ का निशान लगाइए।

5

- |            |             |             |              |
|------------|-------------|-------------|--------------|
| 1. चूहा –  | चुहे ( )    | चूहे ( )    | चूहों ( )    |
| 2. मछली –  | मछलियाँ ( ) | मछलीयाँ ( ) | मछलियों ( )  |
| 3. सेना –  | सेनाओं ( )  | सेनाएँ ( )  | सेनाइयाँ ( ) |
| 4. बच्चा – | बच्चों ( )  | बच्चाओं ( ) | बच्चे ( )    |
| 5. माला–   | मालाएँ ( )  | मालाओं ( )  | मालाए ( )    |

प्र०.4 निम्नलिखित विशेषण शब्दों को उचित संज्ञा शब्दों से जोड़िए।

5

1. ज़हरीला \_\_\_\_\_
2. बूढ़ा \_\_\_\_\_
3. विशाल \_\_\_\_\_
4. वीर \_\_\_\_\_
5. घमासान \_\_\_\_\_

प्र०.5 दिए गए क्रिया शब्दों से खाली जगह भरिए।

5

1. माता जी खाना \_\_\_\_\_
2. मोहन पतंग \_\_\_\_\_
3. शाम को बच्चे पार्क में \_\_\_\_\_
4. मोर वर्षा ऋतु में \_\_\_\_\_
5. मेरा भाई पढ़ \_\_\_\_\_

प्र०.6 अनेक शब्दों के लिए एक शब्द लिखिए।

5

1. पक्षियों का घर \_\_\_\_\_
2. छोटा भाई \_\_\_\_\_
3. जो आसान हो \_\_\_\_\_
4. जो विदेश में रहता हो \_\_\_\_\_
5. जिसके आने की तिथि हो \_\_\_\_\_

खण्ड— 'ग' (पाठ्य पुस्तक)

प्र०.7 निम्न शब्दों के अर्थ लिखिए।

5

1. बरखा , अंदाज , प्रशंसा , बयार , जुलूस

प्र०.8 निम्न प्रश्नों के उत्तर संक्षेप में दीजिए।

5

1. गाँव में मोगली किसके पास रहता था?
2. 'चुभती भूल' लेखक की क्या उम्र थी?
3. सुबह-सुबह नहा-धोकर बच्चे कहाँ जाते हैं?
4. "एफेलिसी" की सहेली कौन थी?
5. गाँव – गली में किसकी बरखा है?

प्र०.9 निम्न में से किन्ही भी तीन प्रश्नों के उत्तर दीजिए।

6

1. ओणम के भोजन में क्या-क्या बनाया जाता है?
2. 'चुभती भूल' यह घटना कितने साल पुरानी है? और लेखक को अपनी गलती का एहसास कब हुआ ?
3. गाँव के लोग कटोरे में दूध क्यों रखते थे?
4. कुम्हारा का गधा कहाँ गिर गया था? मोगली ने उसे कैसे निकाला?

प्र०.10 मूल्यपरक प्रश्न।

2

1. क्या आपने कभी किसी की मदद की है यदि हाँ तो अपने शब्दों में लिखिए।

प्र०.11 किसने किससे कहा?

3

1. "ज्यादा कुछ कहोगे तो तुम्हें गधे पर बिठा दूँगा।"
2. " क्यों बे पाजी , यह क्या है?"
3. " तुम जाओ बेटी।"

प्र०.12 खाली स्थान भरिए।

4

1. हर रोज हमें \_\_\_\_\_ जल्दी उठना चाहिए।
2. गाँव में \_\_\_\_\_ का एक बड़ा पेड़ था।
3. बूढ़ा रोज \_\_\_\_\_ पर आकर बैठता था।
4. अचानक \_\_\_\_\_ को काले बादलो ने ढँक लिया।

प्र०.13 कविता की पंक्तियाँ पूरी करिए।

5

काम \_\_\_\_\_ का \_\_\_\_\_ लगाकर करो  
\_\_\_\_\_ करते हुए  
\_\_\_\_\_ भी \_\_\_\_\_ से मत डरो।

प्र०.14 श्रुतलेखन।

5

खण्ड 'घ' (लेखन)

- प्र०.15 किसी एक विषय पर अनुच्छेद लिखिए। 5  
मेरा प्रिय त्योहार या प्रदूषण
- प्र०.16 किसी एक विषय पर पत्र लिखिए। 5  
बुआजी की शादी में जाने के लिए एक सप्ताह के अवकाश के लिए प्रधानाचार्या को पत्र।  
या  
खेल में प्रथम आने पर अपने मित्र को बधाई पत्र।
- प्र०.17 सामान्य ज्ञान प्रश्न। 5
1. हिन्दी की लिपि का क्या नाम है?
  2. भारत के वर्तमान प्रधानमंत्री कौन है?
  3. भारत का राष्ट्रीय खेल कौन-सा है?
  4. ताजमहल किस नदी के किनारे स्थिति है?
  5. भारत के राष्ट्रगान जन, गण , मन, के रचियता कौन है?



**J.K.G INTERNATIONAL SCHOOL VIJAY NAGAR**

**Final Assessment Sample Paper(2017-18)**

**SUBJECT – MATHS**

**CLASS – III**

**Time 3 hrs.**

**M.M. 80**

**Instructions :**

- All questions are compulsory.
- Read carefully and do neatly
- The question paper consists of 30 questions divided into 5 sections
- **Section A** contains 5 questions of 1 mark each , **Section B** contains 7 questions of 2 marks each , **section C** contains 8 questions of 3 marks each , **Section D** contains 8 questions of 4 marks each , **Section E** –General Awareness(Reasoning) contains 2 questions of 5 marks

**Section-A**

**(5X1)**

**Q1)** Symbol of division is

- a) X      b) -      c) +      d) /

**Q2)** To convert cm into m ,we divide the number of cm by\_\_\_\_\_

- a) 100      b) 50      c) 1000      d) None of these

**Q3)** 3 L 350ml from 9 L 175ml

- a) 9 L 645 ml      b) 5 L 825ml      c) 6 L 325 ml

**Q4)**  $21.75 \times 7 =$ \_\_\_\_\_

- a) 152.25      b) 90.40      c) 152.50

**Q5)** 60 minutes=\_\_\_\_\_

- a) 2 hours      b) 1 hour      c) 3 hours      d) 4 hours

**Section-B**

**(7X2)**

**Q6)** a) 7:45 ; We can also read the time as\_\_\_\_\_

- b) To convert minutes into hours divide by \_\_\_\_\_



**Q7)** a) How many days are there in 5 weeks?\_\_\_\_\_

b) 6556 ml = \_\_\_\_\_ L \_\_\_\_\_ ml

**Q8)** a) Add 8 L 430 ml and 1 L 215 ml

b) 10 times 15 is 150, its true/False

**Q9)**

Children of class 3 love maths. Every month they count the  which teachers given them. One  stands for 5 points.

a) Mohan got 5 stars, Nitin 4, Soniya 3. Find the number of points each child gets.

\_\_\_\_\_

b) Who has scored the maximum number of points? What did you use to solve it repeated addition or multiplication. \_\_\_\_\_

**Q10)** Put the sign <, >, =

6 times 9 \_\_\_\_\_ 15 times 13

8x8 \_\_\_\_\_ 9x8

12x8 \_\_\_\_\_ 50+46

9 times 13 \_\_\_\_\_ 14x8

**Q11)** a) 2 sets of three things \_\_\_\_\_

b) 8 sets of fourteen things \_\_\_\_\_

**Q12)** a) 123, 112233, 111222333, \_\_\_\_\_

b) 10987, 111098, \_\_\_\_\_

Section-C

(8 X3)

**Q13)** a)  $8132 \div 8$  \_\_\_\_\_

b)  $1209 \div 10$  \_\_\_\_\_

**Q14)** a) 72 km 102 m - 5 km 225 m

b) To convert milliliters into litres, divide by \_\_\_\_\_

**Q15)** Convert m and cm into cm:

6m 8 cm


**Q16)** a)  $400\text{ml} + 200\text{ml} +$  \_\_\_\_\_  $\text{ml} = 1\text{L}$

b) Add 36 rupees 25 paise, 48 rupees 40 paise and 54 rupees 50 paise

**Q17)** Use am or pm to write the time

- a) Quarter past 3 in the afternoon \_\_\_\_\_.
- b) Quarter to 11 in the morning \_\_\_\_\_.
- c) The minute hand takes \_\_\_\_\_ minutes to move from 3 to 5.

**Q18)** Draw hands in the clock to show the time



The minute hand is at \_\_\_\_\_

The hour hand is between \_\_\_\_\_

**Q19)** a) Convert into hours: 6 days 5 hours

b) Convert into paise: ₹79.75 = \_\_\_\_\_

**Q20)** On occasion of Guruparv a sikh family bought the flower at the cost given below.

	Rose	Marigold	Tulip	Jasmine
Cost	₹120	₹215	₹312	₹110

- a) What is cost of rose and marigold together? \_\_\_\_\_
- b) Which flower is the costliest? \_\_\_\_\_
- c) What is the difference between the cost of rose and tulip? \_\_\_\_\_
- d) Arrange the flowers in ascending order according to their cost? \_\_\_\_\_

Section-D

(8X4)

**Q21)** A bus has 52 seats. Find the total number of rows in the bus if each seats has 4 seats.

---

---

---

---

**Q22)** Mr. Arora travelled 8 km 600 m by bus, 5 km 580 m by car and 2 km 172 m on foot. How much distance did he travelled in total?

---

---

---

---

**Q23)** Aditi takes 1 L of water to school everyday. How much water is left in the bottle if Aditi drinks 575 ml water?

---

---

---

---

**Q24)** Mrs. Tanya had ₹8000 in her purse. She spent ₹ 4930 on grocery. How much money is left with her?

**Q25)** Complete the multiplication and division fact

4x5=		20÷4=	
	8x9=		48÷6=

**Q26)** Solve it


Km	m	L	ml
17	438	8	500
+12	817	- 2	175
<hr/>		<hr/>	
<hr/>		<hr/>	

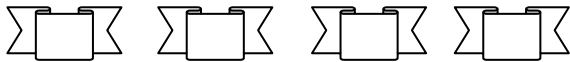

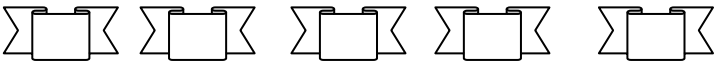
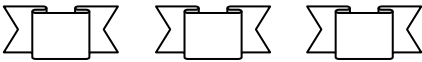
**Q27)** Convert into rupees and paise

a)157p

b)490p

**Q28)** The table given below gives you the information of the families spending the money during the celebration of different festivals:

Each  represents 100 rupees.

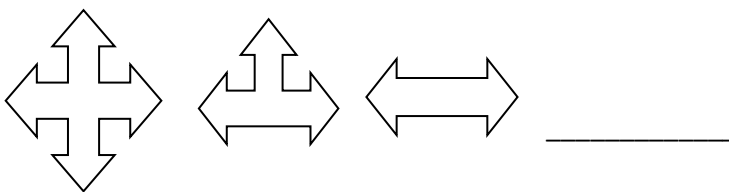
Nanda's	
Sharma's	
George's	
Khan's	

1. How much money did the George family spent during the Christmas celebration?
2. How much money did Khan's family spent?
3. Total amount spent by Khan and Sharma family is-
4. Which family has spent the maximum amount of money on festivals?

**Section-E**

**(5)**

**Q29)**



**Q30)** 103, 106, \_\_\_\_\_

1000,999, \_\_\_\_\_

15, 30 \_\_\_\_\_

**Q1. Multiple choice questions-**

**1x5=5**

- a) Cross the road when the pedestrian traffic light  
1) Red                      2)Green                      3) Blue
- b) Spinach stores food in  
1)Stems                      2)Leaves                      3) Roots
- c) A swallow has a sticky mouth and tongue .This helps it catch  
1) Nuts                      2)Insects                      3) Birds
- d) Digestion completes in the  
1) food pipe                      2)Stomach                      3)Small intestine
- e) Standard unit of length  
1) Kilogram                      2) Metre                      3) Litre

**Q2) Fill in the blanks**

**1x6=6**

- a) Always sharpen your pencil with a \_\_\_\_\_
- b) \_\_\_\_\_ are the animals with feathers on their body.
- c) The air we breathe in , is rich in \_\_\_\_\_
- d) One kilometer is equal to \_\_\_\_\_ metres .
- e) About \_\_\_\_\_ percentage of our body weight is water.
- f)\_\_\_\_\_ do not have their own light.

**Q3) Match the following-**

**1x5= 5**

- |                     |               |
|---------------------|---------------|
| a) Cabbage and mint | 24 hours      |
| b) Geese            | Storm         |
| c) Temperature      | Leaves        |
| d) High speed wind  | Swimming bird |
| e) Rotation         | Thermometer   |

**Q4) True or False against the statement-**

**1x5 = 5**

- a) Do not play with toys
- b) Most plants bear flower
- c) Flight feathers give shape to the birds body
- d) We have four sense organs.
- e) Measurement is an essential parts of our life

**Q5) Circle the odd ones**

**1x5 = 5**

- a) Plugs                      Heaters                      Ball
- b) Papaya                      Apple                      Mango
- c) radish                      Sweet potato                      Broccoli
- d) Food pipe                      Stomach                      Kidney
- e) Sun                      wind                      Mountain

**Q6) Answer the following questions**

**1x8=8**

- a) Name two things that are kept in a first-aid box
- b) Name two plants having tap roots
- c) Name two birds of prey
- d) Name different parts of a bird's body .
- e) Name the organ system to which our brain belongs.
- f) Name the unit of capacity .
- g) Name the main seasons in India
- h) Name the movements of the Earth.

**Q7) Answer the following questions.                      2x6=12**

- a) How can you avoid accidents ?
- b) What is perching?
- c) Why is it important to chew the food well ?
- d) What is capacity?
- e) Define water cycle.
- f) Why does the earth look flat to us ?

**Q8) Answer the following question                      3x3= 9**

- a) Name the organs that form respiratory system . What does this system do?
- b) Write three safety rules to be followed in the class room
- c) Define –i) breeze                      ii) Storm

**Q9) Answer the following question -                      5x5=25**

- a) Draw the labeled diagram parts of a bird's body.
- b) Unscramble the words to find a type of fruits
  - i) NAMOG      (ii) LAPEP    (iii) EGRANO    (iv) HCEAP    (v) AYPAAP
- c) What do we measure things ? Name two units of measuring mass.
- d) Define –i) Solar system    ii) Satellite    iii) Full moon    iv) Half moon    v) New moon

**e) Gk questions**

- i) What do we get from the sheep hairs?
- ii) Which animals look like a tortoise ?
- iii) Which energy we get from the fossils fuels?.
- iv) Who is inventor of computer?
- v) Which is the first Indian satellite?

v) Who is inventor of telephone?



**General Instructions:**

- All the questions are compulsory to do.
  - Do neat and clean work.
  - Marks are allotted along with the questions.
  - Maps to be attached along with answer sheet.
- 

**Q1.Choose the correct answer:-**

(8)

- a. The river Yamuna originates in the \_\_\_\_\_  
(i)Himalayas (ii) Aravalli (iii) Alps
- b. The \_\_\_\_\_ has difficult living conditions.  
(i)Thar Desert (ii) Eastern Coastal Plain (iii) Western Coastal Plain
- c. \_\_\_\_\_ is a spice used in Indian cooking.  
(i)Coconut (ii) Turmeric (iii) Wheat
- d.The \_\_\_\_\_ punish those who break the law.  
(i)hospitals (ii) courts (iii) office
- e. Some countries are ruled by kings and queen known as \_\_\_\_\_ government.  
(i)democracy (ii) monarchy (iii) dictator
- f. Mumbai has \_\_\_\_\_ climate.  
(i)hot (ii) moderate (iii) cold
- g. The city of \_\_\_\_\_ was formed in the year 1690 ce.  
(i)New Delhi (ii) Mumbai (iii) Kolkata
- h. Chennai is located near the\_\_\_\_\_  
(i)Bay of Bengal (ii) Arabian Sea (iii) Indian Ocean

**Q2. Fill in the blanks:-**

(8)

- (a) Mt. Everest is in \_\_\_\_\_
- (b) India has \_\_\_\_\_ physical divisions.
- (c) \_\_\_\_\_ is famous for Alphonso mangoes.
- (d) There are \_\_\_\_\_ states in India.
- (e) The \_\_\_\_\_ government is based in New Delhi.
- (f) Mumbai is considered to be India's \_\_\_\_\_ capital.
- (g) \_\_\_\_\_ is a huge park in Kolkatta.
- (h) The Tamil film industry is known as \_\_\_\_\_.

**Q3. State True/ False:-**

(8)

- (a) Pongal is an important festival in Tamil Nadu (\_\_\_\_\_)
- (b) Mumbai is the capital of India(\_\_\_\_\_)
- (c) We do not follow any rules at home.(\_\_\_\_\_)
- (d) The state government looks after the whole country (\_\_\_\_\_)
- (e) Laws are the rules made by the government(\_\_\_\_\_).
- (f) In summer we wear clothes made of wool (\_\_\_\_\_).
- (g) The Desert in India called Thar(\_\_\_\_\_).
- (h) The Ganga river waters the Northern plains(\_\_\_\_\_).

**Q4. Unscramble the letters to form the correct words:- (8)**

- (a) Chennai receives rainfall in this season (NTERWI) \_\_\_\_\_  
(b) The river near Kolkata (UGHLLI) \_\_\_\_\_  
(c) Earlier name of Mumbai (MOBBYA) \_\_\_\_\_  
(d) The government helps those affected by natural disasters like (DSLOOF) \_\_\_\_\_  
(e) Court of India (IHHG OURCTS) \_\_\_\_\_  
(f) Each state has its own government (TASTE OVERMMENTG) \_\_\_\_\_  
(g) A river flows from south India (APIT) \_\_\_\_\_  
(h) Parts of a country or the world (REIONSG) \_\_\_\_\_

**Q5. Match the following:- (8)**

- | A                       | B                                   |
|-------------------------|-------------------------------------|
| 1. Allahabad            | (a) 7                               |
| 2. World's highest peak | (b) Government                      |
| 3. Appam                | (c) Main language spoken in Kolkata |
| 4. Oranges              | (d) St. Mary's                      |
| 5. Union Territories    | (e) Stew                            |
| 6. Basic roles          | (f) City                            |
| 7. Bengali              | (g) Mt. Everest                     |
| 8. Important church     | (h) Nagpur                          |

**Q6. Very short answer:- (10)**

- a. Name the three mountain ranges of the Himalayas.
- b. What is a coastline?
- c. Mention any one function of a government apart from making laws.
- d. Where is the Nyaya Panchayat working?
- e. What do we call the highest court in the state level?
- f. Name any two tourist spots in Mumbai.
- g. Name the main language spoken in Mumbai.
- h. How many villages were joined together to form Kolkata?
- g. Name any one famous bridge of Kolkata.
- h. Name any one popular dish of Chennai.

**Q7. Answer the following questions briefly:- (12)**

- a. Describe the Great Indian Desert and explain why life is not easy there?
- b. Describe the climate of Mumbai.
- c. Name the main tourist attractions of Kolkata.
- d. Why are we able to grow different types of crops in our country?

**Q8. Value based Question :- (3)**

Why is it important to protect green spaces like Guindy National Park in India?

**Q9. Draw the following:- (4)**

- a. A river
- b. A man in dhoti kurta

**Q10. In a political map of India, show the following : (6)**

- a. Eastern coastal plains   b. Eastern Ghats   c. Northern Mountains   d. Northern Plains   e. Arabian sea  
f. Bay of Bengal

**Q11. General Awareness: (5)**

- a. Name the continent which is also a country.
- b. Name the Land of Five Rivers in India.
- c. Which colour ball is used in the test cricket matches?
- d. Name the man-made wonder of China.
- e. Name the 'Red Planet'.