

JKG INTERNATIONAL SCHOOL, VIJAY NAGAR, GHAZIABAD

FINAL EXAMINATION (2017-18)

SAMPLE PAPER

NAME: _____ CLASS II ____ SUBJECT: ENGLISH MM: 80

Q1. Read the passage carefully and answer the following questions. (5 marks)

Shaurya is very happy today. His summer vacation has started. Father is taking him first to the zoo and then to the amusement park. He has packed his picnic bag with his favourite frisbee and teddy. He tells his mother to give him a packet each of choco chip cookies and waffers. Just then father calls Shaurya, it's time to go! Shaurya runs down the stairs and slips hard. He is hurt, but he smiles and happily sits in the car.

1. Tick the correct option.

- a. Shaurya is very (i) happy (ii) sad
- b. Father is taking Shaurya to (i) movie (ii) zoo
- c. Shaurya's favourite toy is (i) ball (ii) frisbee

2. Write the plural of the following words from the passage.

- a. waffer- _____
- b. stair- _____

Q2. Write 5 lines on 'The Peacock'. (5*1= 5 marks)

Q3. Make Sentences. (3*1= 3 marks)

1. strong-	
2. forest-	

3. warm- _____

Q4. Complete the poem.

(3*1= 3 marks)

I am the music man,

And I can play.

I play the big drum.

Boomdi boom, boomdi boom.

Q5. Word ladder

(2*2= 4 marks)

1. cold → _____ → _____ → _____ → _____

2. shook → _____ → _____ → _____ → _____

Q6. Write the opposites of the following words.

(5*1= 5 marks)

1. high- _____

2. slow- _____

3. deep- _____

4. short- _____

5. dry- _____

Q7. Make rhyming words (2 words from each word)

(2*2= 4 marks)

1. play- _____ , _____

2. now- _____ , _____

Q8. Answer the following questions in one word.

(4*1= 4 marks)

1. Who won in the story “The Wind And The Sun”?

2. How many bowls of porridge were there on the table?

3. Whose bed did Curlylocks sleep in?

4. The ants stored the grains for which season?

Q9. Underline the correct doing word.

(5*1= 5 marks)

Aarav is a kind boy. He likes to draw. He closes the door of his room. He starts painting a picture. Mother knocks the door but Aarav locks it from inside.

Q10. Write the meaning of the following words.

(3*1= 3 marks)

1. forest-

2. starve-

3. spill-

Q11. Answer the following questions.

(3*3= 9 marks)

1. Why did the grasshopper begin to worry?

2. Whose bowl did Curlylocks eat up all the porridge and why?

3. What did the sun do to get the man's coat off?

Q12. Write an application to the Principal of your school asking for 2 days leave?(5marks)

Q13. Fill in the blanks with was or were. (5*1= 5 marks)

1. We _____ waiting for them.
2. The peacock _____ dancing.
3. They _____ working on their class activity.
4. Simran _____ listening to a song.
5. Suraj and Naman _____ playing chess.

Q14. Answer the following General Awareness questions. (5*1= 5 marks)

1. Who is the current President of India?

2. Who wrote the Ramayana?

3. Name the four houses of your school?

4. Who is the new Mayor of Ghaziabad?

Q15. Fill in the blanks with has or have. (5*1= 5 marks)

1. My grandmother _____ a fruit basket.
2. Do you _____ any good book to read?
3. We _____ a garden in our school.
4. Passengers _____ tickets.
5. Our school _____ a big playground.

Q16. Tick the correct joining words in the brackets. (5*1= 5 marks)

1. Tanishka eats chocolate (but, or) her sister does not.
2. The musician played the music (and, but) the students danced.
3. I went to the shop (or, and) bought some vegetables.
4. Do you want tea (or, but) coffee?

5. Is Taj Mahal in Agra (and, or) Mumbai?

Q17. Dictation words.

(5 marks)

Q2. Fill in the blanks from below mentioned hints

(6)

hill stations , soil , nature , spacecraft , map , mango

1. Roots grow under the .
2. People like to go during Summer season.
3. If we want to go moon ,we can travel in a .
4. We get cotton, wool, and silk from .
5. A is drawn on a peice of paper.
6. National fruit of our country is .

Q3. Write 'True' or 'False':

(6)

1. Leaves are of different sizes and different shapes.
2. In winters, "Days are short and nights are long ".
3. Trains that carry goods are called goods trains.
4. A weaver weaves threads into cloth.
5. There are four important directions.
6. Neil Armstrong was the first man to land on the moon.

Q4. Match the following:

(6)

- | | | |
|---------------------------|-----------------------|-----|
| 1. Pumpkin, watermelons | necessary for life | () |
| 2. October, November | east. | () |
| 3. Diesel, CNG, petrol | artificial fibres | () |
| 4. Nylon, rayon, terylene | cars ,buses, scooters | () |
| 5. Sun rises in the | autumn | () |
| 6. Land, air, water | creepers | () |

Q5. Answer the following :

(12)

- | | | |
|--------------------------------|--|--|
| 1. Two plants having thorns. | <input type="text"/>
<input type="text"/>
<input type="text"/> | <input type="text"/>
<input type="text"/>
<input type="text"/> |
| 2. Two months of summer | <input type="text"/>
<input type="text"/>
<input type="text"/> | <input type="text"/>
<input type="text"/>
<input type="text"/> |
| 3. Two animal-driven vehicles. | <input type="text"/>
<input type="text"/>
<input type="text"/> | <input type="text"/>
<input type="text"/>
<input type="text"/> |
| 4. Two activities by tailor | <input type="text"/>
<input type="text"/>
<input type="text"/> | <input type="text"/>
<input type="text"/>
<input type="text"/> |
| 5. Two directions . | <input type="text"/>
<input type="text"/>
<input type="text"/> | <input type="text"/>
<input type="text"/>
<input type="text"/> |
| 6. Two objects in bathroom | <input type="text"/>
<input type="text"/>
<input type="text"/> | <input type="text"/>
<input type="text"/>
<input type="text"/> |

Q6.Circle the correct word given in the bracket:

(4)

1. Water (*plants / animals*) regularly and keep them in proper sunlight.
2. We should drink plenty of (*water / soup*) during summer season.
- 3.We should wear clean and well (*ironed / messy*) clothes.
4. First-ever solar powered boat ‘Aditya’ was launched by (*Kerala / Kolkata*).

Q7. Complete the names:

(12)

L _ _ A V _ _ S	T H _ _ _ E _ _ _ D S
S _ _ A _ _ _ O N	P _ _ _ A _ _ _ E
T R _ _ _ N S _ _ _ O R T	L _ _ _ N _ _ _ D

Q8- Identify and label-

(6)













Q9. Answer the following:

(8)

1. Why leaves are important for a plant?

Handwriting practice lines for question 1, consisting of three sets of three horizontal lines each.

2. How can you help the needy person during the winter season?

Handwriting practice lines for question 2, consisting of three sets of three horizontal lines each.

3. Which animals are used for transporting goods and people in hilly areas ?

Handwriting practice lines for question 3, consisting of three sets of three horizontal lines each.

4. What are deserts?

Handwriting practice lines for question 4, consisting of three sets of three horizontal lines each.

Q10. Answer the following in one word:

(6)

1. Name the tree who have very big leaves ?

2. Name two hot drinks you like to enjoy in winters?

3. In which cities metro trains are running mostly ?

4- What are fibres?

5. Which is the oldest Science museum in the world?

6- Name the highest mountain peak in the world?

Q11. Circle the odd one:

(4)

- | | | | |
|------------------|---------------|---------------|------------------|
| 1. <i>leaf</i> | <i>roots</i> | <i>flower</i> | <i>food</i> |
| 2. <i>spring</i> | <i>autumn</i> | <i>rainy</i> | <i>summer</i> |
| 3. <i>bus</i> | <i>train</i> | <i>car</i> | <i>aeroplane</i> |
| 4. <i>hill</i> | <i>plain</i> | <i>land</i> | <i>sky</i> |

J. K G INTERNATIONAL SCHOOL, Vijay Nagar, Ghaziabad
Annual Assessment (2017-18)
Practice Paper
CLASS –II

Time : 3 hrs.

Hindi

M.M.80

Name

Date

सभी प्रश्न अनिवार्य हैं।
कार्य स्वच्छता से करें।

प्र0.1 अपठित गद्यांश को ध्यान से पढ़िए और पूछे गए प्रश्नों के सही उत्तर पर ✓ निशान लगाइए। 5

बहुत पुरानी बात है। सुंदर गाँव में साधु सिंह और शैतान सिंह नाम के दो भाई रहा करते थे। साधु सिंह छोटा था, वह खूब मेहनती और ईमानदार व्यक्ति था। वह गाँव वालों का आदर किया करता था। इस वजह से गाँव वाले उसे खूब प्यार करते थे। जबकि उसका बड़ा भाई शैतान सिंह बेईमान और दुष्ट व्यक्ति था। शैतान सिंह किसी का आदर नहीं करता था। उनके पिता अनाज का धंधा करते थे। पिता के देहांत के समय वे दोनों छोटे थे और मिल-जुलकर रहते थे। वे बड़े हुए, तो शैतान सिंह के मन में बेईमानी आ गई। उसने पिता की दुकान पर लड़-झगड़कर कब्ज जमा लिया।

1. दोनों भाई किस गाँव में रहते थे?

सुंदरगाँव ()

रामगाँव ()

श्यामगाँव ()

2. साधु सिंह कैसा व्यक्ति था?

कामचोर और आलसी ()

मेहनती और ईमानदार ()

बुद्धिमान ()

3. शैतान सिंह कैसा व्यक्ति था?

सज्जन और परिश्रमी ()

दुष्ट और बेईमान ()

अत्यंत कमजोर ()

4. उनके पिता क्या काम करते थे?

अनाज का धंधा ()

कपड़े का धंधा ()

ईटों का धंधा ()

5. 'ईमानदार' शब्द का विलोम है—

चतुर ()

बेईमान ()

समझदार ()

प्र0-2 निम्न शब्दों के अर्थ लिखो।

- 1 हर लेंगी ————— 2 सुगंध— ————— 3 झाड़ियाँ —————
4 सूप ————— 5 कुट्टी करना —————

प्र०-3 पाठ के आधार पर सही उत्तर पर (✓) का निशान लगाइए— 5

1 चंदा मामा खाते

लड्डू () बादाम () आलू ()

2बहते टप -टप- टप ।

बूँदे () मोती () आँसू ()

3 “ मैं चिप्स के पैकेट ले आती हूँ ”

मोहित () मुदिता () रूचि ()

4 प्यारे बादल , न हो

खुश () उदास() परेशान ()

5 आसमान कीमें

कटोरी () कप () थाली ()

प्र०- 4 कविता की पंक्तियाँ पूरी करो। 5

..... की ने देखो,

लंबी सी एक बना दी।

सब थी भीगी -भागी,

सबने अपनी सुखा दी।

प्र०-5 निम्न प्रश्नों के उत्तर दीजिए 10

1 अम्मा बच्चे को क्या बनाकर पिलाती है?

उ०

2 “ चंदा मामा ” कविता से कवि का नाम बताइए ?

उ० _____

3 छोटा लड़का पेड़ पर क्यों चढ़ गया ?

उ० _____

4 परी ने सबको केक खाने के लिए मना क्यों किया ?

उ० _____

5 सब बच्चे डरकर कहाँ छिप गए थे ?

उ० _____

प्र०-6 दिए गए क्रिया शब्दों में ✓ का निशान लगाइए।

5

गाना ()

राम ()

वह ()

सोहन ()

यह ()

हँसना ()

पढ़ना ()

रीता ()

आप ()

मेरी ()

रोना ()

सोनिया ()

नहाना ()

हम ()

मैं ()

प्र०-7 अनेक शब्दों के लिए एक शब्द लिखिए।

4

1 जो सब्जी बेचता है — _____

2 जो स्कूल में पढ़ता है — _____

3 जो क्रिकेट खेलता है — _____

4 जो मरीज़ का इलाज करता है —————

प्र०-8 दिए गए वाक्यों में सर्वनाम शब्दों पर गोला बनाइए।

5

- 1 वह गाना सुन रहा है।
- 2 यह कमीज़ मेरी है।
- 3 तुम्हारा बैग कहाँ है?
- 4 आप क्या बना रही है ?
- 5 मैं कक्षा दो में पढ़ता हूँ।

प्र०-9 दिए गए वाक्यों में से विशेषण शब्द छाँटकर लिखिए।

4

- 1 रमा सुंदर लड़की है। —————
- 2 मुझे एक गिलास दूध दो। —————
- 3 पीला पत्ता पेड़ से गिरा। —————
- 4 गाय मीठा दूध देती है। —————

प्र०-10 किसने किससे कहा ?

4

- 1 “ इसकी खुशबू बहुत अच्छी है। ” किसने कहा किससे कहा
—————
- 2 “ प्यारे बादल न हो उदास ”
—————

प्र०-11 वाक्य बनाइए

3

1 चिड़ियाघर —————
—————

2 लड्डू — _____

3 इंद्रधनुष — _____

प्र०-12 प्रधानाचार्या को दो दिन के लिए अवकाश पत्र

5

बी -21 ,विजय नगर

गाजियाबाद

दिनांक — _____

प्रधानाचार्या

जे के जी इंटरनेशनल स्कूल

विजय नगर

गाजियाबाद

विषय — दो दिन के अवकाश के लिए प्रार्थना — पत्र।

महोदया,

सविनय निवेदन है कि मैं कक्षा _____ का /की _____ हूँ । अचानक कल रात

मेरी _____ ख़राब हो जाने के कारण डॉक्टर ने मुझे _____ दिन आराम

करने के लिए कहा है। इसलिए मुझे दिनांक _____ और _____ का अवकाश देने

की कृपा करें। मैं आपका / आपकी आभारी रहूँगा /रहूँगी।

धन्यवाद

_____आज्ञाकारी _____

प्र०-13 श्रुतलेखन

5

1 _____

2 _____

3 _____

4 _____

5 _____

प्र०-14 सामान्य ज्ञान प्रश्न

1 अपने विद्यालय के चार सदनों के नाम लिखिए।

2

उ० _____

2 राष्ट्रगान के रचियता कौन है ?

1

उ० _____

3 भारत के राष्ट्रीय ध्वज में कितने व कौन से रंग हैं?

2

उ० _____

प्र०-15 " दीपावली " या "मेरा विद्यालय" पर अनुच्छेद लिखिए।

5



J.K.G INTERNATIONAL SCHOOL VIJAY NAGAR

SAMPLE PAPER FOR ANNUAL EXAM (2017-18)

SUBJECT – MATHS

CLASS – II

Time 3 hrs.

M.M. 80

Instructions :

- All questions are compulsory.
- Read carefully and do neatly
- The question paper consists of 30 questions divided into 5 sections
- **Section A** contains 5 questions of 1 mark each , **Section B** contains 7 questions of 2 marks each , **section C** contains 8 questions of 3 marks each , **Section D** contains 8 questions of 4 marks each , **Section E** –General Awareness(Reasoning) contains 2 questions of 5 marks

Section-A

(5x1)

Choose the correct answer

1. Six times three is equal to _____
a) Eighteen b) twenty c) fifteen d) twelve
2. Standard unit of capacity is _____
a) Kg b) m c) l d) ml
3. 2m 30 cm _____ cm
a) 302 cm b) 023cm c) 320cm d) 230 cm
4. One out of two equal parts of a whole is _____
a) $\frac{1}{2}$ b) $\frac{1}{3}$ c) $\frac{1}{4}$ d) $\frac{1}{5}$
5. January ,February _____
a) April b) May c) May d) June

Section-B

(7x2)

Q6. Complete it

- a) $20+10+100=$ _____
- b) $\text{₹}100-\text{₹}75=$ _____


Q7. Write in words

- a) $\text{₹} 17.00=$ _____
- b) $\text{₹}300=$ _____


Q8) a) If today is Wednesday, then yesterday was _____

b) Republic Day is celebrated on _____

Q9) Draw the hands of the clock according to the time indicated



10'o clock

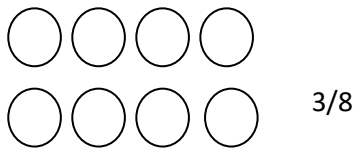


12:45

Q10) a) Weight of a child _____(kg/g)

b) A small water bottle _____(l/ml)

Q11) a) Color to show the given fraction



b)How many grams are needed to make 650 gm to 1 kg._____

Q12)

a) Circle the correct fraction



a) $1/2$ b) $1/3$ c) $1/4$

b) $46 \times 10 = \underline{\hspace{2cm}}$

Section-C

(8x3)

Q13) Match the following

- | | |
|----------------|---------------------------|
| Teacher's day | 2 nd October |
| November | 7 days |
| Gandhi Jayanti | 30 days |
| 1 week | 5 th September |
| February | 2 weeks |
| Fort night | 29 days |

Q14) Write in fraction

- a) One by three _____
- b) One fourth _____
- c) Three seventh _____

Q15) How many days are there in the

- a) Month of September?

- b) Quarter part 3 can also be written as

Q16)

- a) In a collection of 12 balls, 3 balls are red colored, 4 balls are blue colored and remaining are yellow colored. Write the fraction for the yellow colored balls?

- b) The fraction for the shaded part is



- c) 1 hour= _____ minutes.

Q17)

- a) Quarter past the hour. The minute hand is at _____.
- b) 9 times 7= _____
- c) 6 times 9= _____

Q18) Observe the table and answer the questions.

S.no	Decoration items for diwali celebration	No. of packets sold
1.	Diya	75
2.	Candles	140
3.	Bulbs	120

1. 10 less than the no. of packets of Candles.

2. 10 more than the no. of packets of diyas

3. Arrange the number of items in ascending order.

Q19) follow the pattern

a) 200, 250, 300, _____

b) 11, 22 _____

Q20) a) 12 times 9 = _____

b) 10 times 10 = _____

c) 8 times 11 = _____

Section-D

(8x4)

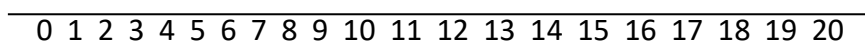
Q21) A bookshelf can hold 38 books. Find the total number of books in 9 such bookshelf?

Q22) The weight of Rahul is 28 kg. His sister is 15 kg heavier than him. What is the weight of his sister?

Q23) I buy a toy car for ₹79.50. If I pay a note of ₹100. How much change should I get back?

Q24) Multiply on number line -

$8 \times 2 =$ _____



Q25) Observe the table and answer the question

FLAVOUR	NUMBER OF CONES
Strawberry	38
Vanilla	25
Chocolate	43
Mango	20

- a) Which flavor is most popular? _____
 b) How many people like strawberry flavor? _____
 c) Which is liked more: vanilla or mango? _____
 d) How many cones did the shopkeeper sell in total? _____

Q26) Solve the following:-

$$\begin{array}{r}
 1. \quad \text{₹} \quad \text{p} \\
 50 \quad 50 \\
 +25 \quad 25 \\
 \hline
 \hline
 \end{array}$$

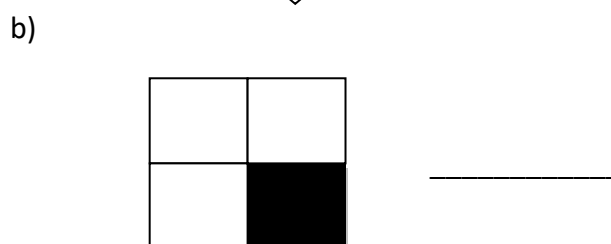
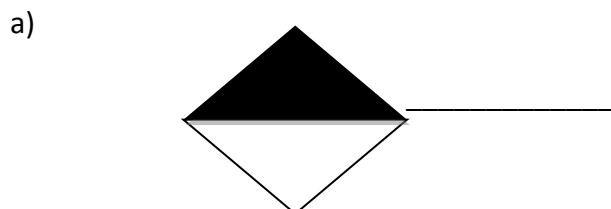
$$\begin{array}{r}
 2. \quad \text{₹} \quad \text{p} \\
 75 \quad 50 \\
 - 35 \quad 50 \\
 \hline
 \hline
 \end{array}$$



Q27)

$$\begin{array}{r}
 \text{kg} \quad \text{g} \\
 23 \quad 0 \\
 + 38 \quad 0 \\
 \hline
 \hline
 \end{array}$$

$$\begin{array}{r}
 \text{H T O} \\
 1 \quad 9 \\
 \times 7 \\
 \hline
 \hline
 \end{array}$$

Q28) Write the fraction representing the shaded portion





Section-E

(5)

Fill in the blanks.

Q29) 90, 81, 72, 63, _____

100, 200, 300 _____

Q30)

