

**JKG INTERNATIONAL SCHOOL, FINAL EXAMINATION (2017-2018)**  
**SAMPLE PAPER- ENGLISH**

**CLASS – I**

**Q.1 Fill in the blanks with suitable words given in the help box (1\*5=5)**

ants, fruits, green, asleep, river

1. The tree has

2. Anandi was fast

3. Three friend “The Bubble, The Straw and The Shoe” wanted to cross

the

4. Anandi filled  colour in the leaves.

5. Crawling  and spider’s webs.

**Q.2 Write True or False (1\*5=5)**

1. There are six colours in the rainbow. \_\_\_\_\_

2. Leaves are brown in colour. \_\_\_\_\_

3. Anandi loves to draw and paint. \_\_\_\_\_

4. The seed of the berry falls down. \_\_\_\_\_

5. The Shoe floated on the bubble. \_\_\_\_\_

**Q.3 Write the opposite words of the following: (1\*3=3)**

1. fast

2. in

3. happy

**Q.4 Make 4 new words from the given word: (1\*4=4)**

**RAINBOW**

1

2

3

4

**Q.5 Make sentences (1\*3=3)**

1. garden:

2. children:

3. rainbow:

**Q.6 Answer the following questions (1\*5=5)**

1. What is the colour of the sun in the story “Anandi’s Rainbow”?

2. How many friends are there in the story “The Bubble , The Straw and The Shoe”?

3. Where does the little bird see the fruit?

4. What did Anandi see outside her window?

5. Who shook his head in the story "The Bubble, The Straw and The Shoe"?

**Q.7 Value based question, tick(✓) the correct option and cross (✗) the wrong.** (0.5\*2= 2)

1. We should not work hard. ( )
2. We should respect our elders and parents ( )
3. We should tease animals. ( )
4. We should not complete our work. ( )

**Q.8 Dictation** (1\*6=6)

1	<input type="text"/> <input type="text"/> <input type="text"/>	2	<input type="text"/> <input type="text"/> <input type="text"/>
3	<input type="text"/> <input type="text"/> <input type="text"/>	4	<input type="text"/> <input type="text"/> <input type="text"/>
5	<input type="text"/> <input type="text"/> <input type="text"/>	6	<input type="text"/> <input type="text"/> <input type="text"/>

**Q.9 Complete the poem** (1\*5=5)

It is hot

The  is blue. A little  comes looking for you.

More clouds come. They bring  sing and

It's  again

**Q.10 Rhyming Words**

**(1\*2=2)**

bring 



 hot 



**Q.11 Fill in the blanks with (has / have)**

**(1\*5=5)**

1. Sonu \_\_\_\_\_ a new toy.
2. Rabbits \_\_\_\_\_ long ears.
3. We \_\_\_\_\_ many pens.
4. I \_\_\_\_\_ a new pink doll.
5. You \_\_\_\_\_ a big room.

**Q.12 Rearrange in a meaningful sentences.**

**(1\*5=5)**

1. love my I pet | .  


2. can bat the fly  


3. boy a is ram  


4. eat I like to a banana  


5. king of the jungle the lion is the  


**Q.13 Complete the sentences with help of (In/on/Under)**

**(1\*5=5)**

1. The cat is sitting 


 the table.
2. The bird is flying 


 the tree

3. The pencil is  the table.

4. The cup is  her hand.

5. Purse is  the chair.

**Q.14 Join the sentences and make one sentence. (1\*5=5)**

1. I love to eat bread. I love to eat jam.

2. Deepak has a pencil. Deepak has a sharpener.

3. Sonu loves to draw. Sonu loves to paint.

4. Pari has a bag. Pari has a bottle.

5. Mona has a dog. Mona has a cat.

**Q.15 Read the passage and answer the following (4\*2=8)**

Rahul's class went to the school carnival today. It was a lot of fun. Rahul won two prizes. He won a blue balloon and a toy car. He had a great time with all of his friends. Then, he got popcorn and lemonade with his friends. Finally, he got to watch a magic show. He can't wait to get home and tell his parents all about his fun day!

1. Where did Rahul's class go?

2. What did Rahul win?

3. What did he do first?



Q.17 Answer the following based on general knowledge (1\*5=5)

Q.1 Who is the Prime Minister of India?

---

---

---

Q.2 Name the four houses of your school?

---

---

---

Q.3 Name the National bird of your country?

---

---

---

Q.4 Name the National language of your country?

---

---

---

Q.5 Who is called the “Father of the Nation” of our country?

---

---

---

**JKG INTERNATIONAL SCHOOL, VIJAYNAGAR, GHAZIABAD.**

**SAMPLE PAPER (SA – 2)**

**NAME:** \_\_\_\_\_ **SUB: EVS** **CLASS: 1**\_\_\_ **DATE:** \_\_\_\_\_ **MM:80**

**Q1- Multiple choice questions (MCQ) (10)**

1. Who was the first Prime minister of your country?  
a. Jawaharlal Nehru                      b. Indira Gandhi                      c. APJ Abdulkalam
2. We get food from plants and \_\_\_\_\_.  
a. vegetables                      b. animals                      c. strong
3. We use \_\_\_\_\_ and raincoats during rainy season.  
a. sweaters                      b. cold-drinks                      c. umbrellas
4. In school all children wear \_\_\_\_\_.  
a. uniform                      b. cotton clothes                      c. party clothes
5. We should never \_\_\_\_\_ animals.  
a. tease                      b. hurt                      c. both
6. Some \_\_\_\_\_ live both on land and in water.  
a. animals                      b. cats                      c. birds
7. Different animals eat different kind of \_\_\_\_\_.  
a. foods                      b. fruits                      c. plants
8. Plant eaters are the animals who can eat only \_\_\_\_\_.  
a. grass and leaves                      b. flesh                      c. insects
9. By air transport we can travel in the \_\_\_\_\_.  
a. moon                      b. sun                      c. sky
10. The satellite of earth is  
a. moon                      b. mars                      c. mercury



**Q2. Fill in the blanks from below mentioned hints**

**(6)**

*Cotton plant, strong, forest, cheetah, vehicles, home, rainy, first*

1. Food makes us healthy and

2. We get cotton from

3. Wild animals live in

4. The

is the fastest land animal.

5. The rank given to our school by "D L Magazine" recently

6. You can see dark clouds on a

day.

**Q3. Write 'True' or 'False':**

**(6)**

1. We eat three meals in a day.

2. We wear clothes to cover our body.

3. We should not give clean water and food to our pets.

4. The bird lives in a nest.

5. Auto rickshaws are the means of land transport.

6. Rainbow is a band of five colours.

**Q4. Match the following:**

**(6)**

- |                            |                |       |
|----------------------------|----------------|-------|
| 1. Wheat, grain, maize     | morning        | ( )   |
| 2. Summer, winter, rainy   | air transport. | ( )   |
| 3. Fish, whales, octopuses | grain eaters   | ( )   |
| 4. Pigeon, sparrow, goat   | water animals  | ( )   |
| 5. Aeroplane, helicopters  | seasons        | ( )   |
| 6. Sun rises in            | food grains    | s ( ) |

**Q5. Give two examples of the following:**

**(12)**

- |                                  |  |  |
|----------------------------------|--|--|
| 1. Items made from milk.         | <input type="text"/><br><input type="text"/> | <input type="text"/><br><input type="text"/> |
| 2. Things we use in rainy season | <input type="text"/><br><input type="text"/> | <input type="text"/><br><input type="text"/> |
| 3. Two insects.                  | <input type="text"/><br><input type="text"/> | <input type="text"/><br><input type="text"/> |
| 4. Two plant eaters              | <input type="text"/><br><input type="text"/> | <input type="text"/><br><input type="text"/> |
| 5. Two water transport .         | <input type="text"/><br><input type="text"/> | <input type="text"/><br><input type="text"/> |
| 6. Sun gives us                  | <input type="text"/><br><input type="text"/> | <input type="text"/><br><input type="text"/> |

**Q6. Circle the correct word given in the bracket:**

**(4)**

1. (*Tiger / Lion*) is the national animal of our country
2. We should wear ironed and ( *dirty / clean* ) clothes.
3. We should provide our pets a good ( *shelter / forest* ).
4. Domestic and pet ( *animals / eaters* ) are kept in human- made homes.

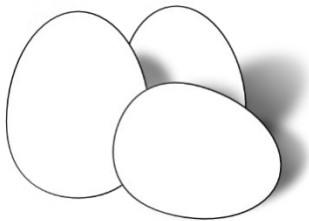
Q7. Complete the names:

(12)

D ___ N N ___ R	I N ___ E ___ T
S ___ A ___ O N	T R ___ N S ___ O R T
B ___ R ___ S	S U ___ R ___ S E

Q8- Identify and label-

(6)



---

---

---



---

---


---



---

---

---



---

---


---



---

---

---



---

---

---

**Q9. Answer the following:**

**(8)**

1. Which food is not good for health?

Handwriting practice lines for question 1, consisting of three sets of three horizontal lines each.

2. When do we like to wear colourful and beautiful clothes?

Handwriting practice lines for question 2, consisting of three sets of three horizontal lines each.

3. Name types of animals?

Handwriting practice lines for question 3, consisting of three sets of three horizontal lines each.

4. Name four food categories of animals?

Handwriting practice lines for question 4, consisting of three sets of three horizontal lines each.

**Q10. Answer the following in one word:**

**(6)**

1. When do we take lunch ?

---

---

---

2. Who is the recently elected "Mayor of Ghaziabad"?

---

---

---

3. How many legs a Spider has ?

---

---

---

4- Where does a dog lives?

---

---

---

5. Where the ship sails?

---

---

---

6- Where the Sun sets?

---

---

---

**Q11. Circle the odd one:**

**(4)**

- |                 |                |               |                |
|-----------------|----------------|---------------|----------------|
| 1. <i>ghee</i>  | <i>butter</i>  | <i>cheese</i> | <i>meat</i>    |
| 2. <i>shirt</i> | <i>t shirt</i> | <i>shorts</i> | <i>sweater</i> |
| 3. <i>cat</i>   | <i>dog</i>     | <i>rabbit</i> | <i>lion</i>    |
| 4. <i>nest</i>  | <i>den</i>     | <i>burrow</i> | <i>worms</i>   |

Name -----

Date -----

सभी प्रश्न अनिवार्य हैं।  
कार्य स्वच्छता से करें।

प्र०-1 दिए गए प्रश्नों के सही उत्तर पर ( ✓ ) का निशान लगाइए— 5

1 दर्द होने पर चूहे को क्या खाना पड़ा ?

चूरन ( )

आलू ( )

2 हमारी बातें कैसी होनी चाहिए ?

मठरी जैसी ( )

मिसरी जैसी ( )

3 किसका हरा रंग सुंदर था ?

तोते का ( )

कोयल का ( )

4 बिल्ली को दिल्ली कैसी लगी ?

अच्छी ( )

बुरी ( )

5 वैभव ने किसका चित्र लिया था ?

मैना ( )

नैया ( )

प्र०-2 उलटे अर्थ वाले शब्दों का मिलान करो। 5

1 हँसना पुराना ( )

2 सुबह कल ( )

3 आज शाम ( )

4 खुशबू रोना ( )

5 नया बदबू ( )

प्र०-3 निम्न शब्दों के अर्थ लिखो। 5

1 बोलना — -----

2 मन— -----

3 सुनहरा — -----

4 पेड़ — -----

5 आइना — -----

जब बोलो , तब ..... बोलो ,  
..... में मिसरी – सी .....

जब बोलो , तब ..... बोलो ,  
कभी न बातें ..... बोलो ।

प्र०-5 निम्न प्रश्नों के उत्तर दीजिए—

1 खरगोश को अपना कौन सा रंग पसंद नहीं था ?

उ०-----  
-----

2 बिल्ली कहाँ पहुँच गई ?

उ०-----

3 लड़का रोहन के पापा के पास क्यों आया ?

उ०-----  
-----

4 बड़े होने पर किन्हें सुधारना कठिन होता है?

उ०-----  
-----

5 मन की गाँठें कैसे खोलनी चाहिए ?

उ०-----  
-----





पौधे सुनहरा उपाय शरारती सोच-समझकर

- 1 दादा जी को " " सूझा ।
- 2 मौसी को " " लगाने का शौक था ।
- 3 हिरन का रंग " " था।
- 4 हमें " " बोलना चाहिए।
- 5 रोहन एक " " लड़का था।

प्र०- 12 सही पर ✓ और गलत पर ✗ का निशान लगाओ।

5

- 1 बिल्ली जलेबी देखकर खुश हुई थी। ( )
- 2 हमें हमेशा हँसकर बोलना चाहिए। ( )
- 3 रोहन के घर उसके चाचा जी आए थे। ( )
- 4 हमें मिलजुलकर रहना चाहिए। ( )
- 5 भालू को देखकर खरगोश ने हरा रंग लगा लिया। ( )

प्र०- 13 नीचे दी गई मात्राओं से दो दो शब्द बनाइए।

6

1 ऊ ( ू ) - \_\_\_\_\_

2 2 ऐ ( ै ) - \_\_\_\_\_

3 3 ओ ( ौ ) - - \_\_\_\_\_

1 शरारती — \_\_\_\_\_

2 हँसकर — \_\_\_\_\_

3 तोता — \_\_\_\_\_

4 भलाई — \_\_\_\_\_

5 सहायता — \_\_\_\_\_

1 " 15 अगस्त " को क्या मनाते हैं?

\_\_\_\_\_

2 हमारे देश के प्रधानमंत्री का क्या नाम है?

\_\_\_\_\_

3 हम " बापू " किसे कहकर बुलाते हैं?

\_\_\_\_\_

4 आप किस शहर में रहते हैं?

\_\_\_\_\_

5 भारत की राष्ट्रभाषा कौन सी है?

\_\_\_\_\_

1 \_\_\_\_\_ 2 \_\_\_\_\_ 3 \_\_\_\_\_

4 \_\_\_\_\_

5 \_\_\_\_\_

**J.K.G. INTERNATIONAL SCHOOL VIJAY NAGAR**  
**SAMPLE PAPER FOR ANNUAL EXAM (2017-18)**

**SUBJECT – MATHS**

**CLASS –I \_\_\_\_\_**

**Time 3 hrs.**

**M.M. 80**

**Instructions :**

- All questions are compulsory.
- Read carefully and do neatly
- The question paper consists of 30 questions divided into 5 sections
- **Section A** contains 5 questions of 1 mark each , **Section B** contains 7 questions of 2 marks each , **section C** contains 8 questions of 3 marks each , **Section D** contains 8 questions of 4 marks each , **Section E** –General Awareness(Reasoning) contains 2 questions of 5 marks

**SECTION – A**

**(5 X 1)**

**Q.1.** The new currency note used in India is \_\_\_\_\_

- (a) 2000 rupee                      (b) 100 rupee                      (c) 5 rupee

**Q.2.** 4 times 3 is equal to \_\_\_\_\_

- (a) 8                                      (b) 18                                      (c) 12

**Q.3.** The symbol of Indian rupee is \_\_\_\_\_

- (a) ₹                                      (b) \$                                      (c) ¥

**Q.4.** The numeral for seventy five is

- (a) 75                                      (b) 50                                      (c) 57

Q.5. 'D' is the \_\_\_\_\_ letter in India.

(a.) third

(b.) sixth

(c.) fourth

SECTION – B

(7X 2)

Q.6. Put the following in repeated addition form

(a)  $5 \times 2 = \underline{\quad} + \underline{\quad} + \underline{\quad} + \underline{\quad} + \underline{\quad}$

$8 \times 6 = \underline{\quad} + \underline{\quad} + \underline{\quad} + \underline{\quad} + \underline{\quad} + \underline{\quad}$

Q.7. Write the amount shown below



Q.8. Fill in the blanks:

(a)  $9 \times 2 = \underline{\quad}$

(b)  $7 \times 7 = \underline{\quad}$

(c)  $5 \times 8 = \underline{\quad}$

(d)  $3 \times 4 = \underline{\quad}$

Q.9. Circle the longer leaf



Q.10. Which is longer finger or footspan \_\_\_\_\_

Q.11. - Match the following  
(0.5\*4=2)

- |      |   |         |
|------|---|---------|
| (a.) |  | 3 X 2   |
| (b.) | 2 X 3   | 16      |
| (c.) | Egg   | 5 rupee |
| (d.) | 2 times 8   | oval    |

Q.12. Write the symbol do we use to denote Rs. \_\_\_\_\_

SECTION – C

(8 X 3)



Q.13. Write the missing number.  
(1/2\*6=3)

- (a.) 4, \_\_\_\_\_, 12, \_\_\_\_\_, 20
- (b.) 5, 10, \_\_\_\_\_, 20, \_\_\_\_\_
- (c.) 6, \_\_\_\_\_, \_\_\_\_\_, 24, 30

Q.14. Write number names of the following:-

- (a.) 5 tens + 4ones - \_\_\_\_\_
- (b.) 30 + 9 - \_\_\_\_\_
- (c.) 80+9 - \_\_\_\_\_
- (d.) 9 tens + 0 ones- \_\_\_\_\_
- (e.) 10 + 10 + 4 - \_\_\_\_\_

Q.15. Match the currency notes and coins with their value

1.		2 rupee
2.		20 rupee
3.		100 rupee

**Q.16. Ram is having 35. .... (3)**

**His father gives him 65 more. ....**

**Now How much money Ram is having in total. ....**

**Q.17. - Write the numbers to fill the circle.**
















(a.)  $6 + 6 + 6 + 6 = \underline{\quad\quad} \times \underline{\quad\quad}$

(b.)  $5 \times 7 = \bigcirc + \bigcirc + \bigcirc + \bigcirc + \bigcirc$

(c.)  $\bigcirc \times 9 = 81$


























(d.)  $5 + \bigcirc = 15$

**Q.18. Use pictograph to answer the questions**

				
				
				
				
				
Goat	Cow	Chicken	Horse	Pig

1. Which animal is least in number? \_\_\_\_\_
2. How many goats are there? \_\_\_\_\_
3. Which one is more, chicken or cow. \_\_\_\_\_

Q.19

walk 							
bus 							
scooter 							
bike 							
car 							

1. How many children travel by scooter? \_\_\_\_\_
2. How many children travel by car? \_\_\_\_\_
3. Which one is least liked vehicle? \_\_\_\_\_



**Q.20. - Write number names of the following:-**

(a.) 7 tens + 2 ones

\_\_\_\_\_

(b.) 9 tens

\_\_\_\_\_

(c.)  $10+10+10+10+10+4$

\_\_\_\_\_

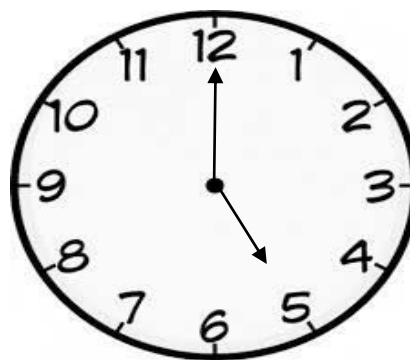
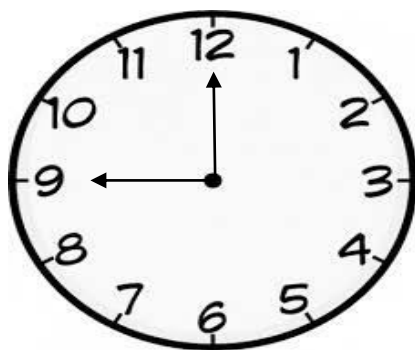
(d.)  $15-2$

\_\_\_\_\_

**SECTION – D**

**( 8X 4)**

**Q.21. ) Write the time shown in the clock.**



**Q.22. ) Write the ordinal number of**

(a.) December is the \_\_\_\_\_ month of the year.

(b.) August is the \_\_\_\_\_ month in the year.

(c.) Wednesday is the \_\_\_\_\_ day in week

**Q.23.** Answer the following

(a) What comes before 70? \_\_\_\_\_

(b) The number between 50 and 52 \_\_\_\_\_

(c) What comes after 89? \_\_\_\_\_

**Q.24.** Write the number names :-

(a) 45 \_\_\_\_\_

(b) 60 \_\_\_\_\_

(c) 19 \_\_\_\_\_

(d) 14 \_\_\_\_\_

**Q.25. )** Add or substrate and write the matching letter below the answer to read the message.

<b>E</b>	<b>B</b>	<b>A</b>	<b>C</b>	<b>M</b>	<b>L</b>
<b>10</b>	<b>16</b>	<b>14</b>	<b>20</b>	<b>30</b>	<b>28</b>

<b>9</b>	<b>12</b>	<b>19</b>	<b>18</b>	<b>25</b>	<b>38</b>
<b>+ 7</b>	<b>-2</b>	<b>+1</b>	<b>-4</b>	<b>+3</b>	<b>-8</b>

**Q.26. )** Write the numbers in:-

(a.) increasing order

(i) 56, 76, 63, 13, 29

\_\_\_\_\_, \_\_\_\_\_, \_\_\_\_\_, \_\_\_\_\_, \_\_\_\_\_

(ii) 38, 46, 52, 21, 78

\_\_\_\_\_, \_\_\_\_\_, \_\_\_\_\_, \_\_\_\_\_, \_\_\_\_\_

**Q.27. - Write Table of 7-**

		<b>T</b>	<b>O</b>		<b>T</b>	<b>O</b>
<b>7</b>	<b>X</b>		<b>1</b>	<b>=</b>	<b>0</b>	<b>7</b>

**Q.28. - Identify the currency notes and label them.**









**Q.29) Complete the following patterns**

**(1\*3=3)**

(a.) A 1 B 2 C 3 \_\_, \_\_, \_\_, \_\_

(b.) ABC BCD CDE \_\_\_\_\_ EFG FGH \_\_\_\_\_

(c.)     \_\_\_\_\_   \_\_\_\_\_ 

**Q.30. Identify the pattern.**

**TIC TICTIC**

**What is the pattern here?**

